



Name : _____

Date : _____

Meaning of Multiplication


Circle the group that matches the equation.

$$2 \times 2 = 4$$



How many Easter Eggs are there in that group? _____

$$1 \times 2 = 2$$



How many Easter Eggs are there in that group? _____