

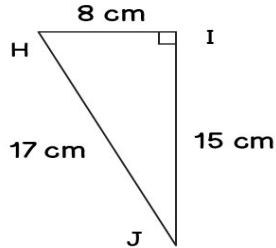
Name: \_\_\_\_\_

Date: \_\_\_\_\_

# Trigonometry Practice

Find all three primary trigonometric ratios for the mentioned angle!

1)



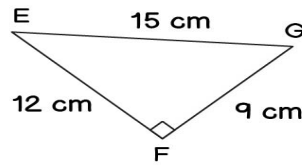
$\angle H$

\_\_\_\_\_

\_\_\_\_\_

\_\_\_\_\_

3)



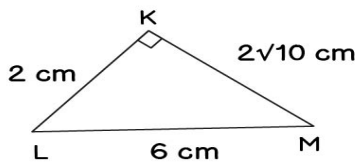
$\angle G$

\_\_\_\_\_

\_\_\_\_\_

\_\_\_\_\_

2)



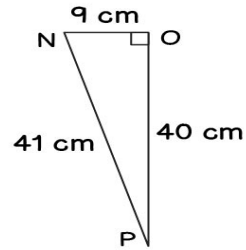
$\angle K$

\_\_\_\_\_

\_\_\_\_\_

\_\_\_\_\_

4)



$\angle P$

\_\_\_\_\_

\_\_\_\_\_

\_\_\_\_\_