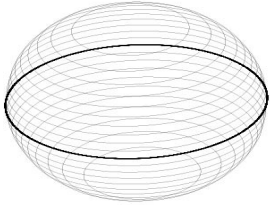


Name: _____ Date: _____

Identify the Properties

Fill in the table with the properties of each solid figure.

1)



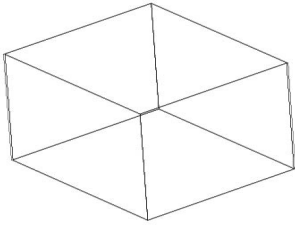
Number of Faces: _____

Number of Edges: _____

Number of Vertices: _____

Example in Real Life: _____

2)



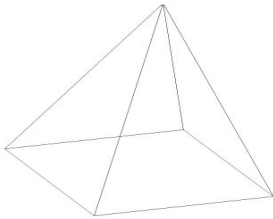
Number of Faces: _____

Number of Edges: _____

Number of Vertices: _____

Example in Real Life: _____

3)



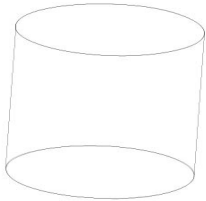
Number of Faces: _____

Number of Edges: _____

Number of Vertices: _____

Example in Real Life: _____

4)



Number of Faces: _____

Number of Edges: _____

Number of Vertices: _____

Example in Real Life: _____