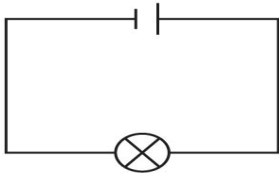


Series Circuit

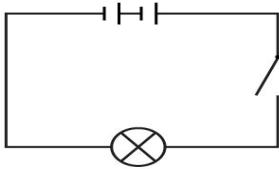
Name: _____

Date: _____

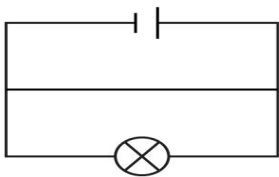
Look at these electrical circuits and answer the question for each one!



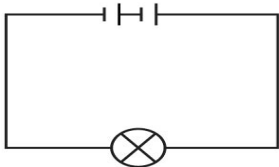
Will the bulb light? Why / why not?



Will the bulb light? Why / why not?



Will the bulb light? Why / why not?



Will the bulb light? Why / why not?
