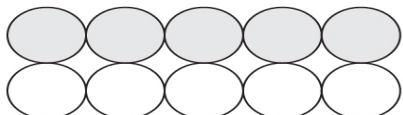


MISSING ADDEND

Name: _____

Date: _____

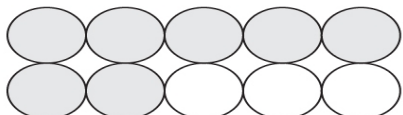
Write the missing addend.




$$5 + \underline{\quad} = 10$$



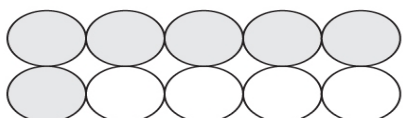
$$\underline{\quad} + 9 = 10$$




$$\underline{\quad} + 7 = 10$$



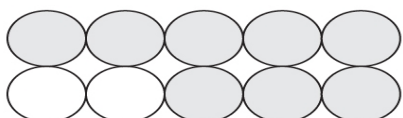
$$2 + \underline{\quad} = 10$$



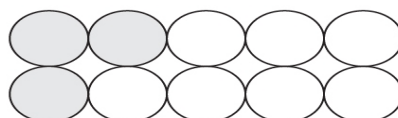
$$\underline{\quad} + 6 = 10$$




$$0 + \underline{\quad} = 10$$



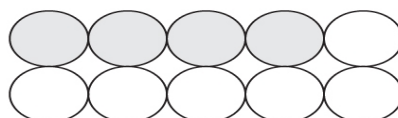
$$\underline{\quad} + 8 = 10$$



$$\underline{\quad} + 3 = 10$$



$$1 + \underline{\quad} = 10$$



$$4 + \underline{\quad} = 10$$