




















Map Key Practice

Name: _____

Date: _____

Use the map to complete the sentences below.
Write the wind direction in the blank. (north, south, east, or west)

			
MAP KEY			
 Airport  Andy's House  Bus Station  Gasoline Station  Market  Museum  Playground  Restaurant  School			

1. The school is _____ of the museum
2. The airport is _____ of the restaurant
3. The restaurant is _____ of the playground
4. Andy's House is _____ of the airport
5. The playground is _____ of the market
6. The bus station is _____ of the gasoline station
7. The museum is _____ of the school
8. The gasoline station is _____ of the market
9. The market is _____ of the gasoline station