



Name: \_\_\_\_\_ Date: \_\_\_\_\_

# MULTIPLICATION ARRAYS


Complete the multiplication equation that describe each array.




\_\_\_\_\_ × \_\_\_\_\_ = \_\_\_\_\_




\_\_\_\_\_ × \_\_\_\_\_ = \_\_\_\_\_




\_\_\_\_\_ × \_\_\_\_\_ = \_\_\_\_\_



\_\_\_\_\_ × \_\_\_\_\_ = \_\_\_\_\_



\_\_\_\_\_ × \_\_\_\_\_ = \_\_\_\_\_



\_\_\_\_\_ × \_\_\_\_\_ = \_\_\_\_\_