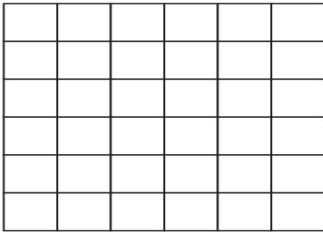


Name: _____ Date: _____

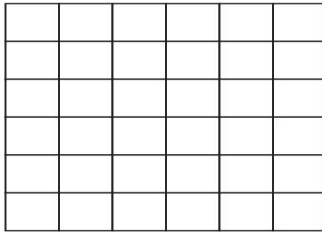
Multiplication Arrays

Color the squares to solve the multiplication questions.

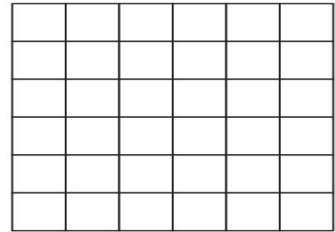
$3 \times 3 = \underline{\quad}$



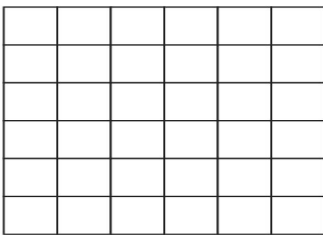
$3 \times 2 = \underline{\quad}$



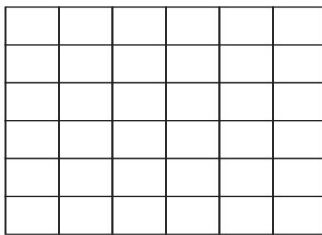
$4 \times 4 = \underline{\quad}$



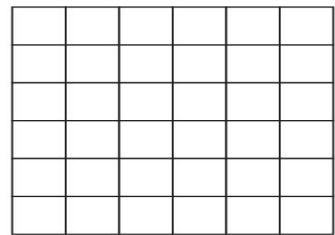
$4 \times 3 = \underline{\quad}$



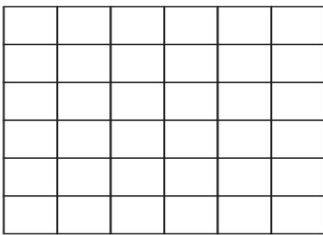
$2 \times 5 = \underline{\quad}$



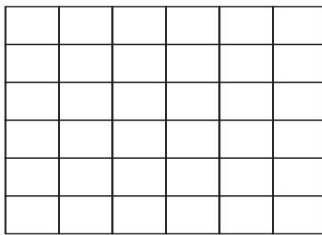
$4 \times 5 = \underline{\quad}$



$5 \times 3 = \underline{\quad}$



$6 \times 5 = \underline{\quad}$



$5 \times 6 = \underline{\quad}$

