


Name: _____


Date: _____

MISSING ADDEND


Find the missing addend.

1.  + 5 = 15

8. 9 +  = 11


2. 7 +  = 13


9.  + 7 = 15

3. 4 +  = 14


10.  + 10 = 12


4.  + 8 = 11

11. 6 +  = 13


5. 6 +  = 10

12.  + 6 = 8

6. 3 +  = 12

13. 3 +  = 7

7.  + 9 = 14

14. 4 +  = 5