

Inequalities and Graphing on Number Line

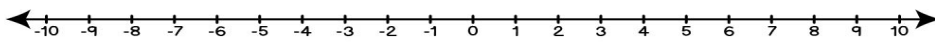
Worksheet

Name: _____

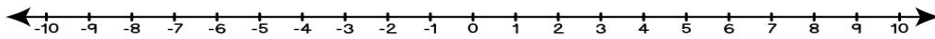
Date: _____

Graph each inequality on a number line!

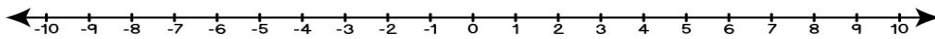
1) $x > -3$



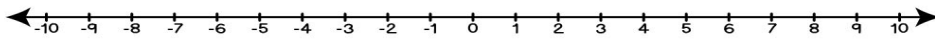
2) $x < 0$



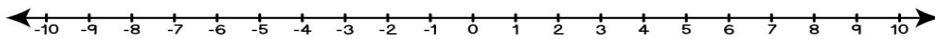
3) $x < 4$



4) $x \geq 2$



5) $x \leq -5$



6) $x \geq 7$

