






Name: _____

Date: _____

Arrays Of Fruit

Look at each array below. Write the repeated addition sentence that matches the array.
Then, solve the repeated addition to find the total.

Array	Repeated Addition Sentence	Total
	$2 + 2 + 2 + 2 + 2$	
	$3 + 3 + 3 + 3 + 3$	
	$2 + 2 + 2$	
	$2 + 2 + 2 + 2 + 2$	
	$1 + 1 + 1 + 1$	