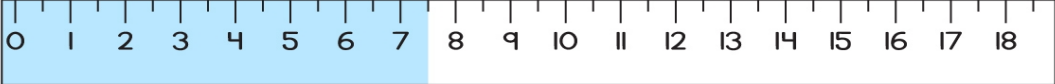

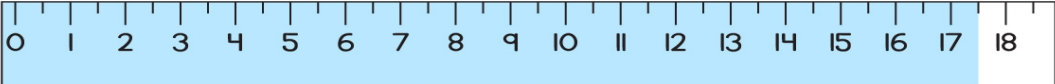
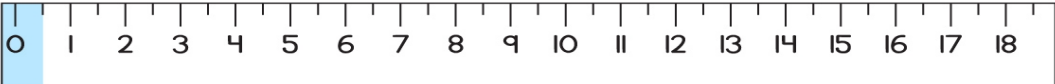
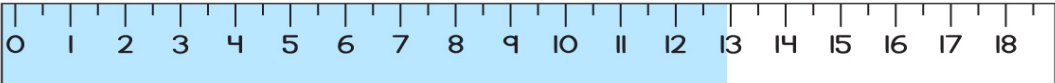
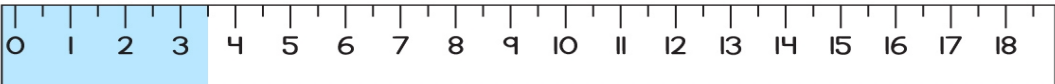
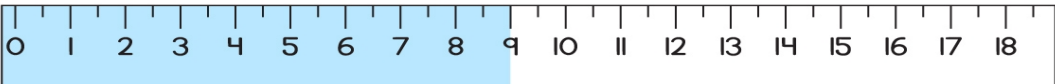
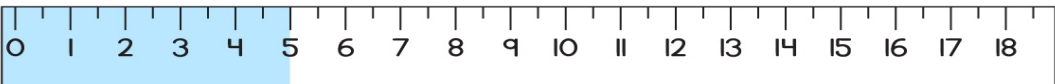
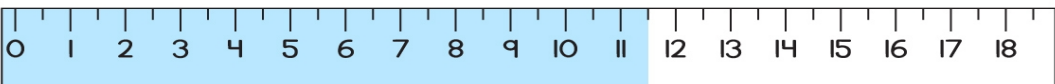
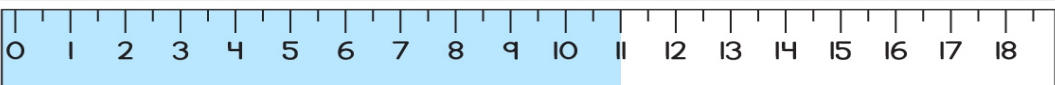
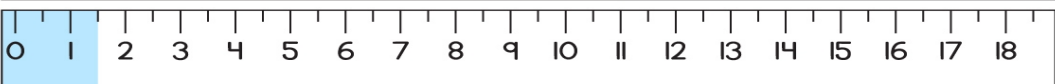


MEASURING WITH RULER

Name: _____

Date: _____

Read the length of the line on the ruler and write the length next to the ruler.

	<input type="text" value="cm"/>
	<input type="text" value="cm"/>
	<input type="text" value="cm"/>
	<input type="text" value="cm"/>
	<input type="text" value="cm"/>
	<input type="text" value="cm"/>
	<input type="text" value="cm"/>
	<input type="text" value="cm"/>
	<input type="text" value="cm"/>
	<input type="text" value="cm"/>
	<input type="text" value="cm"/>