


Name: _____ Date: _____


Practice Using a Dichotomous Key

Identify the following organisms using the dichotomous key above:




1. This organism has feathers but cannot fly. What species is it?

Answer: _____



2. This organism does not have feathers and lives in water. It has scales. What species is it?

Answer: _____



3. This organism has no feathers, no scales, and lives on land. What species is it?

Answer: _____



4. This organism has feathers and can fly. What species is it?

Answer: _____