

# Coordinate Plane Challenge

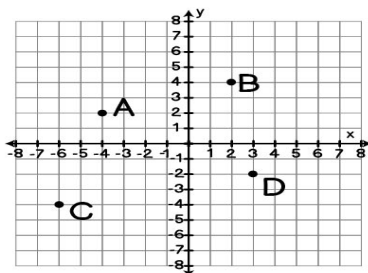
## Worksheets

Name: \_\_\_\_\_

Date: \_\_\_\_\_

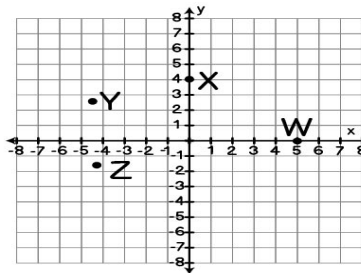
Answer the question by choosing the correct option!

1. Which point is in Quadrant I?



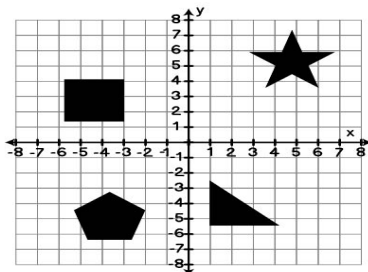
- a) Point A      c) Point C  
b) Point B      d) Point D

2. Which point is on the y-axis?



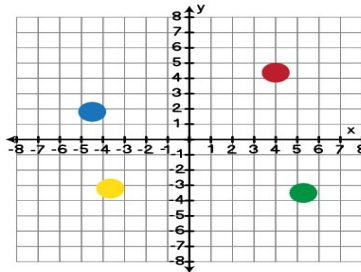
- a) Point W      c) Point Y  
b) Point X      d) Point Z

3. Which shape is in Quadrant IV?



- a) Square      c) Triangle  
b) Star      d) Pentagon

4. Which color is in Quadrant II??



- a) Red      c) Green  
b) Yellow      d) Blue