


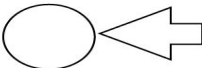


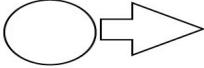



Name: _____

Date: _____

Metals and Nonmetals

Characteristics

Directions : Based on the following physical and chemical properties, determine which are metals and non-metals.

 <p>Luster</p>	 <p>Gain electron</p>
 <p>Corrosion</p>	 <p>Electric Conductivity</p>
 <p>Lose electron</p>	 <p>Density</p>
 <p>Melting Points</p>	 <p>Heat Conductivity</p>