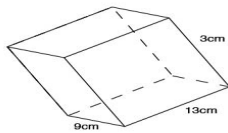


# Surface Area of Prisms and Cylinders

Find the surface area of each figure.

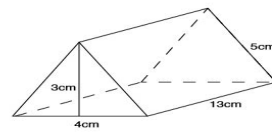
Name: \_\_\_\_\_ Date: \_\_\_\_\_

1



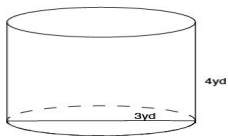
Surface area = \_\_\_\_\_

2



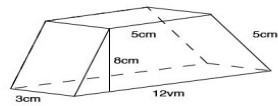
Surface area = \_\_\_\_\_

3



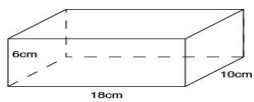
Surface area = \_\_\_\_\_

4



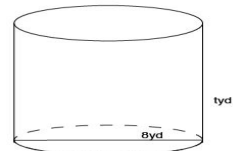
Surface area = \_\_\_\_\_

5



Surface area = \_\_\_\_\_

6



Surface area = \_\_\_\_\_