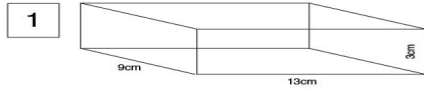


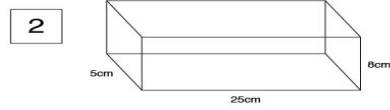
# Surface Area Rectangular Prism

Find the surface area of each rectangular prism.

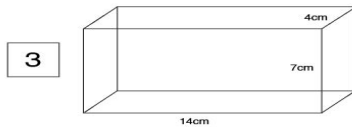
Name: \_\_\_\_\_ Date: \_\_\_\_\_



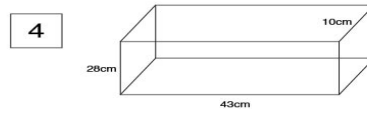
Surface area = \_\_\_\_\_



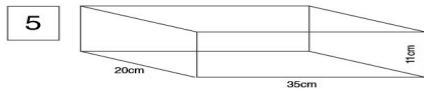
Surface area = \_\_\_\_\_



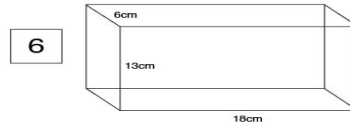
Surface area = \_\_\_\_\_



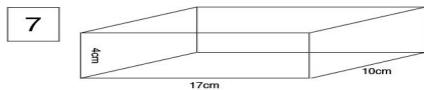
Surface area = \_\_\_\_\_



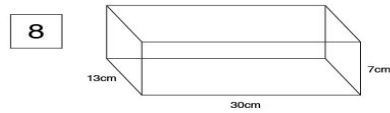
Surface area = \_\_\_\_\_



Surface area = \_\_\_\_\_



Surface area = \_\_\_\_\_



Surface area = \_\_\_\_\_