

Name: _____

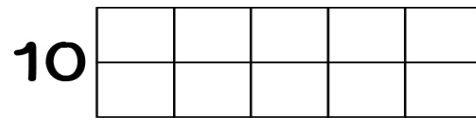
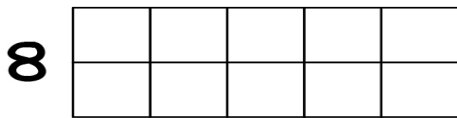
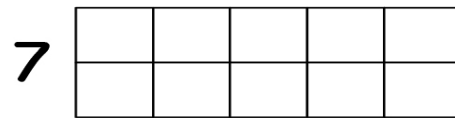
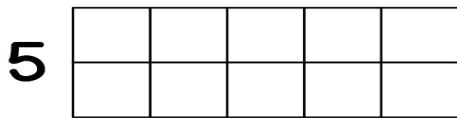
Date: _____

Morning Work

Finish the pattern.



Show the number in ten frames.



Draw the math story.

3 balloons + 1 balloons