

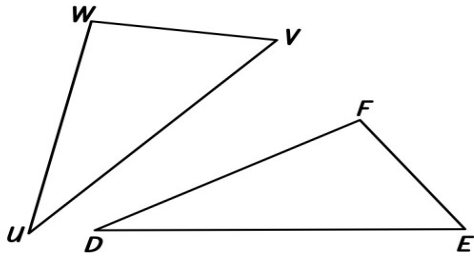
Name: _____

Date: _____

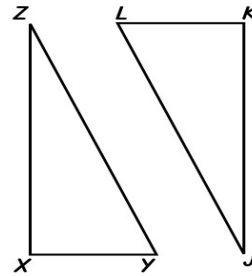
Congruent Triangles Worksheet

Indicate the corresponding sides and angles for each congruence statement.

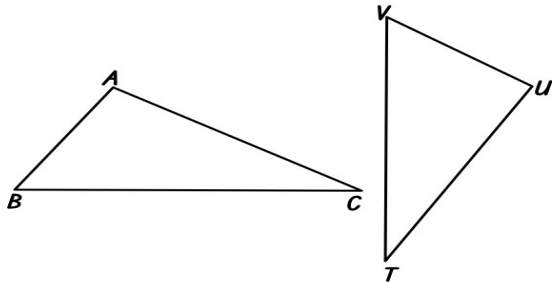
1 $\triangle UVW \cong \triangle DEF$



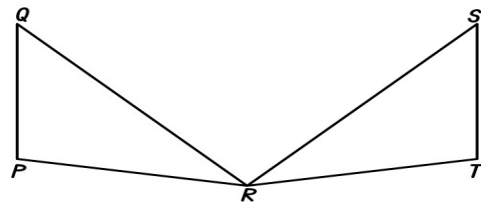
2 $\triangle XYZ \cong \triangle K LJ$



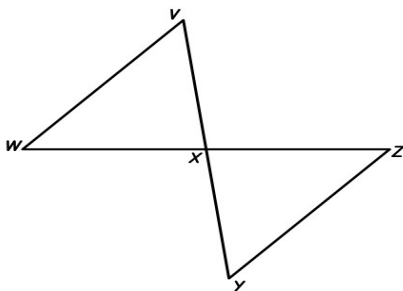
3 $\triangle ABC \cong \triangle UVT$



4 $\triangle PQR \cong \triangle T SR$



5 $\triangle VWX \cong \triangle YZX$



6 $\triangle RST \cong \triangle SRU$

