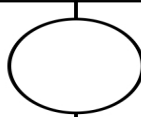


Name: _____

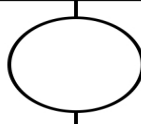
Date: _____

COMPARING PLACE VALUE

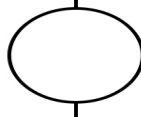
Look at both and decide which number is bigger
Write $<$, $>$, $=$ in the circle to compare



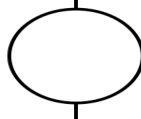
TWELVE



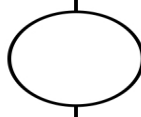

TWENTY



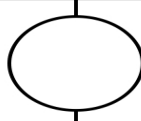
TEN



FIVE



FIFTEEN



FOUR