

Name: _____


CCSS Use addition to find the total number of objects arranged in rectangular arrays with up to 5 rows and up to 5 columns...

Repeated Addition Arrays

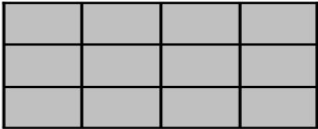

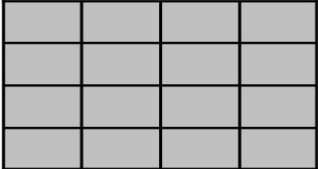
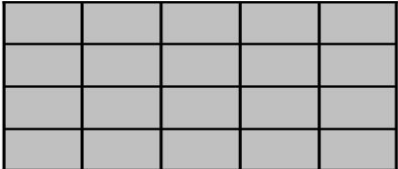
Directions: Write an equation to solve the problems.

Use repeated addition to write an equation to show how many shaded boxes are shown by the arrays.

Example:



$$3 + 3 + 3 = 9$$

1.  _____	2.  _____
3.  _____	4.  _____

____ I double checked my work.