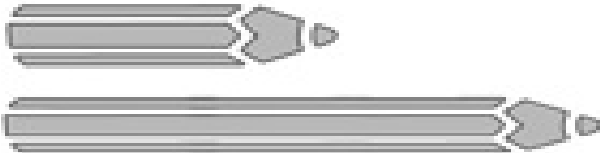



Name: \_\_\_\_\_

## Longer and Shorter Measurement

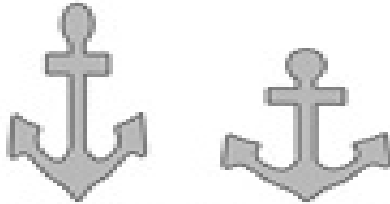
1. Circle the one that is longer.



2. Circle the one that is shorter.



3. Circle the one that is shorter.



4. Circle the one that is longer.

