























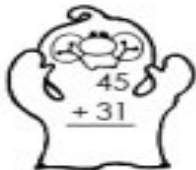




## Halloween Math Maze

Worksheet 1

Solve the addition problems. Color all of the ghosts that have an even numbered sum to find a path to the haunted house.

 $\begin{array}{r} 3 \\ + 3 \\ \hline \end{array}$	 $\begin{array}{r} 25 \\ + 11 \\ \hline \end{array}$	 $\begin{array}{r} 47 \\ + 41 \\ \hline \end{array}$	 $\begin{array}{r} 35 \\ + 13 \\ \hline \end{array}$	 $\begin{array}{r} 41 \\ + 26 \\ \hline \end{array}$	 $\begin{array}{r} 14 \\ + 23 \\ \hline \end{array}$
 $\begin{array}{r} 22 \\ + 31 \\ \hline \end{array}$	 $\begin{array}{r} 45 \\ + 14 \\ \hline \end{array}$	 $\begin{array}{r} 7 \\ + 2 \\ \hline \end{array}$	 $\begin{array}{r} 9 \\ + 9 \\ \hline \end{array}$	 $\begin{array}{r} 13 \\ + 42 \\ \hline \end{array}$	 $\begin{array}{r} 15 \\ + 6 \\ \hline \end{array}$
 $\begin{array}{r} 44 \\ + 22 \\ \hline \end{array}$	 $\begin{array}{r} 52 \\ + 24 \\ \hline \end{array}$	 $\begin{array}{r} 22 \\ + 36 \\ \hline \end{array}$	 $\begin{array}{r} 41 \\ + 31 \\ \hline \end{array}$	 $\begin{array}{r} 11 \\ + 46 \\ \hline \end{array}$	 $\begin{array}{r} 71 \\ + 10 \\ \hline \end{array}$
 $\begin{array}{r} 66 \\ + 12 \\ \hline \end{array}$	 $\begin{array}{r} 14 \\ + 33 \\ \hline \end{array}$	 $\begin{array}{r} 7 \\ + 8 \\ \hline \end{array}$	 $\begin{array}{r} 27 \\ + 62 \\ \hline \end{array}$		
 $\begin{array}{r} 88 \\ + 10 \\ \hline \end{array}$	 $\begin{array}{r} 45 \\ + 31 \\ \hline \end{array}$	 $\begin{array}{r} 15 \\ + 51 \\ \hline \end{array}$	 $\begin{array}{r} 33 \\ + 45 \\ \hline \end{array}$		