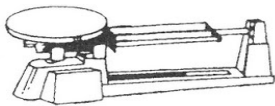


**Apparatus Identification**

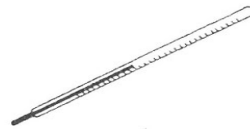
Part A Match each piece of apparatus with its use by writing the correct letter or letters in the spaces provided.



A. Balance



B. Beakers



C. Thermometer




D. Graduated Cylinder



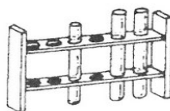
E. Test Tubes



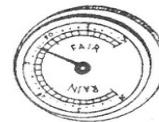
F. Stirring Rod



G. Rain Gauge



H. Test Tube Rack




I. Barometer



J. Bunsen Burner



K. Tripod, Wire Gauze Square



L. Metric Ruler



M. Test Tube Holder

- |  |  |
|--|--|
| _____ 1. Measuring temperature           | _____ 6. Holding a hot test tube                             |
| _____ 2. Measuring volume                | _____ 7. Mixing solutions                                    |
| _____ 3. Measuring precipitation         | _____ 8. Measuring air pressure                              |
| _____ 4. Providing heat or an open flame | _____ 9. Measuring length                                    |
| _____ 5. Measuring mass                  | _____ 10. Placing an object for heating over a Bunsen burner |