

APPENDIX A
WORKSHEET 1
PLANE FIGURES (Level 1)

OBJECTIVES:

You should be able to:

- (1) Describe properties of plane figures
- (2) Define a polygon
- (3) Compare polygons
- (4) Find the sum of the angles of various polygons

ACTIVITIES

1. Describe the properties of the following shapes (in your own words).


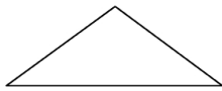


Fig. 3.1

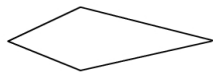


Fig. 3.3

Fig.

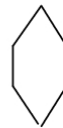
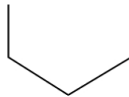
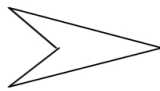


Fig.3.5



Fig. 3.6

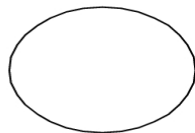


Fig. 3.7

Fig.

3.8