

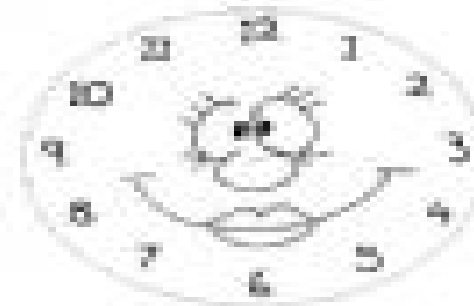
WHAT'S THE TIME?




12:00 half-past twelve




3:00 half-past eight



6:00 half-past three



9:00 half-past ten



12:00 half-past eleven



3:00 half-past twelve