







Reading Pictographs (E)

Answer the questions about the pictograph.

Students Who Wear Glasses at Central P.S.

Second Grade	
Third Grade	
Fourth Grade	
Fifth Grade	
Sixth Grade	

 = 4 students

1. Which grade includes the most students who wear glasses? How many?
2. Which grade includes the fewest students who wear glasses? How many?
3. How many students wear glasses in the entire school?
4. Which grades have the same number of students who wear glasses?
5. If 12 students wear glasses in the first grade, how do your answers change to the questions above?