





Name: \_\_\_\_\_

## Birdwatching Pictograph

Pat, Jim, Linda, and Paul went on a bird watching walk.  
The pictograph below shows how many birds each person saw.

Birdwatching Trip

Name	Number of Birds Seen
Pat	
Jim	
Linda	
Paul	

Each  represents 2 birds

- How many birds did Pat see? 1. \_\_\_\_\_
- How many birds did Jim see? 2. \_\_\_\_\_
- How many birds did Paul see? 3. \_\_\_\_\_
- How many more birds did Paul see than Linda? 4. \_\_\_\_\_
- How many birds did Jim and Pat see together? 5. \_\_\_\_\_
- Did Jim see an odd or even number of birds? 6. \_\_\_\_\_
- Who saw eleven birds? 7. \_\_\_\_\_
- If Jim had seen three more birds, how many symbols would be next to his name on the pictograph? 8. \_\_\_\_\_
- Who saw fewer birds: Jim or Paul? 9. \_\_\_\_\_
- Did Linda see more or less than a dozen birds? 10. \_\_\_\_\_
- Tell how you would show 4 birds on the pictograph?  
11. \_\_\_\_\_
- What is the total number of birds seen by the 4 people? 12. \_\_\_\_\_