






Name _____

Present Count

Find information in a pictograph.

Use the pictograph to answer the questions.

Students	Presents
Kenny	
Rachel	
Justin	
Derek	
Megan	

This pictograph shows how many presents each student got for his/her birthday.

Note: Each  represents 2 presents.

1. How many presents did Kenny get? _____
2. Who got the most presents? _____
3. How many more presents did Megan get than Derek? _____
4. How presents did Rachel and Kenny get together? _____
5. Who got the fewest presents? _____