

Name

Date



FRACTIONS OF SHAPES 1

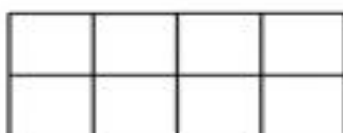
Shade the correct fraction of each shape.



Shade $\frac{1}{2}$



Shade $\frac{1}{4}$



Shade $\frac{5}{8}$



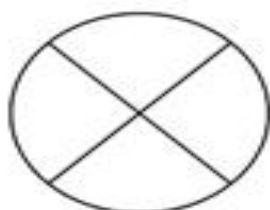
Shade $\frac{4}{6}$



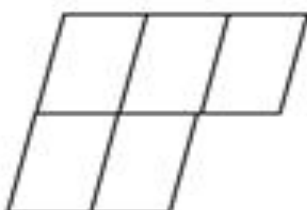
Shade $\frac{2}{3}$



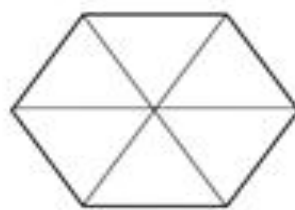
Shade $\frac{1}{2}$



Shade $\frac{3}{6}$



Shade $\frac{4}{5}$



Shade $\frac{5}{6}$



©2010 Math Salamanders Ltd.

MATH-SALAMANDERS.COM