




Name \_\_\_\_\_

Date \_\_\_\_\_

# IDENTIFYING COINS

Identify and count each coins below, and write the number in the table!



PENNIES	NICKELS	DIMES	QUARTERS